

Name: _____

Year: _____

Date: _____



Subtracting from Multiples of 10 (A)



Section A

Use the number lines to complete the subtractions.

$20 - 4 =$



$70 - 7 =$



$40 - 5 =$



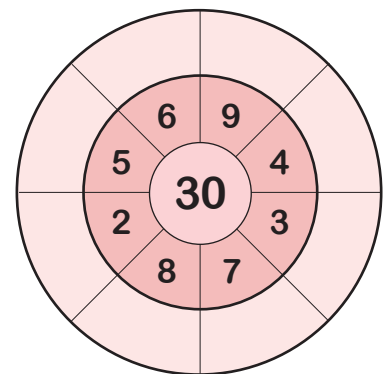
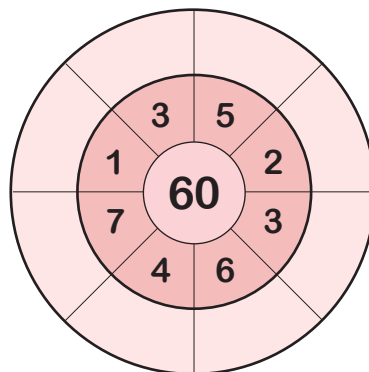
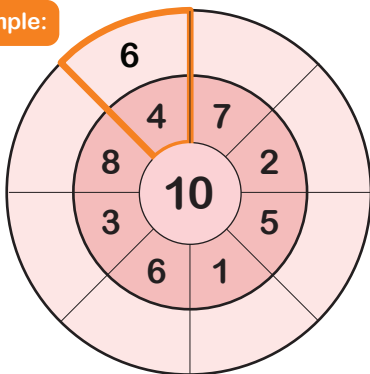
$90 - 8 =$



Section B Subtraction Wheels

Start with the number at the centre and subtract the number outside of it.

Example:



Section C Pattern Spotting

Complete the subtractions, what do you notice?

$10 - 3 =$

$20 - 3 =$

$30 - 3 =$

$40 - 3 =$

$50 - 3 =$

$60 - 3 =$

$90 - 8 =$

$80 - 8 =$

$70 - 8 =$

$60 - 8 =$

$50 - 8 =$

$40 - 8 =$

$30 - 5 =$

$40 - 5 =$

$50 - 5 =$

$60 - 5 =$

$70 - 5 =$

$80 - 5 =$

What do you notice?